


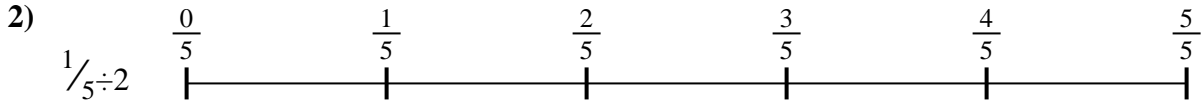


Use the numberline to solve each problem. The first is marked for you.

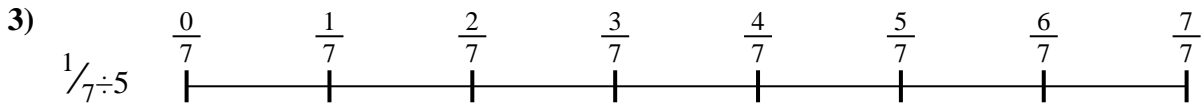
**Answers**




1. \_\_\_\_\_



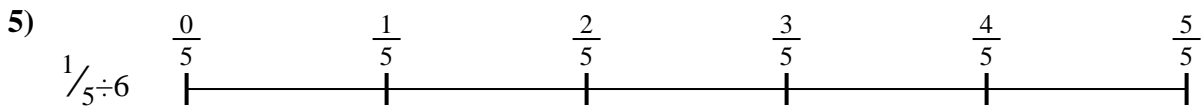
2. \_\_\_\_\_



3. \_\_\_\_\_



4. \_\_\_\_\_



5. \_\_\_\_\_



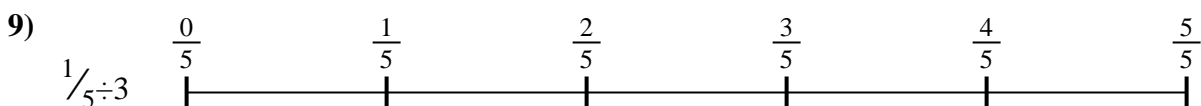
6. \_\_\_\_\_



7. \_\_\_\_\_



8. \_\_\_\_\_

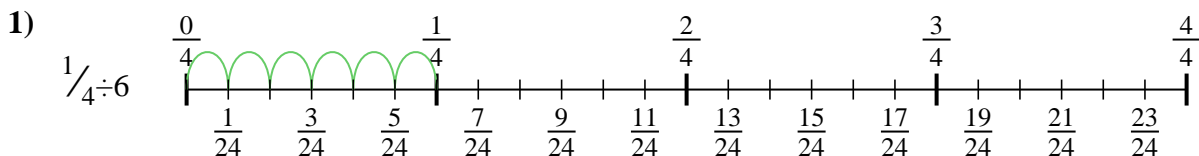


9. \_\_\_\_\_

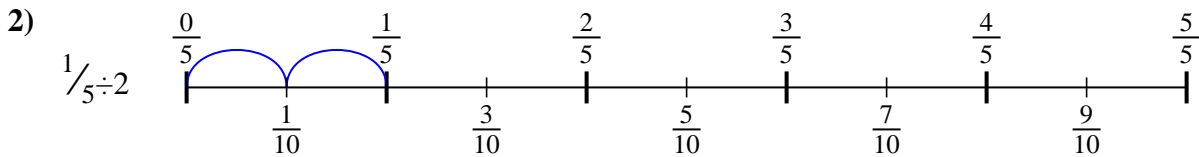


Use the numberline to solve each problem. The first is marked for you.

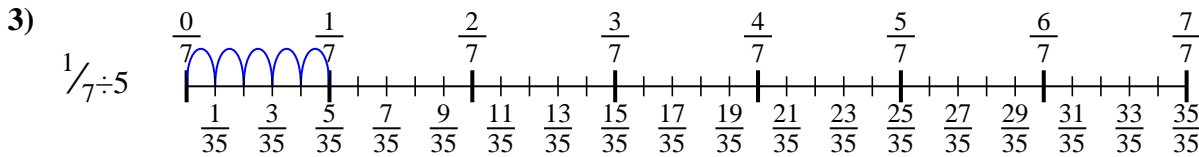
**Answers**



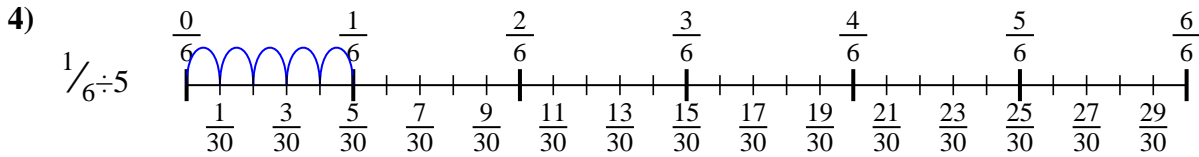
1.  $\frac{1}{24}$



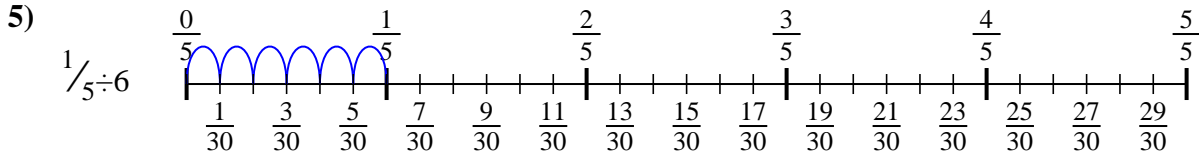
2.  $\frac{1}{10}$



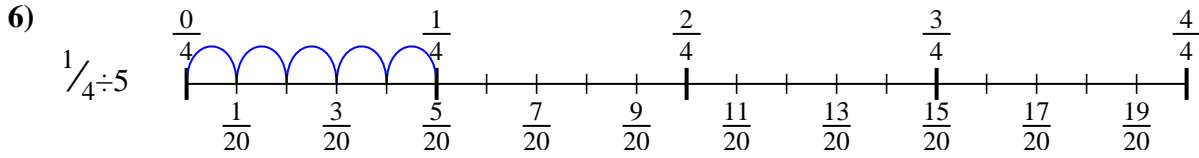
3.  $\frac{1}{35}$



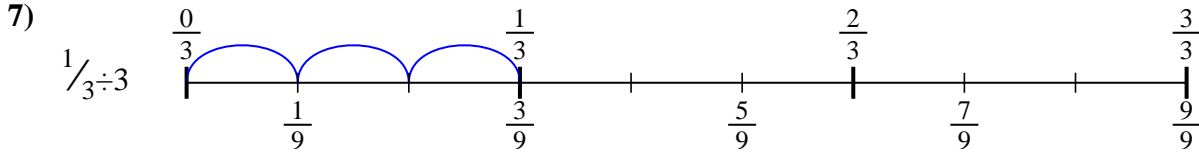
4.  $\frac{1}{30}$



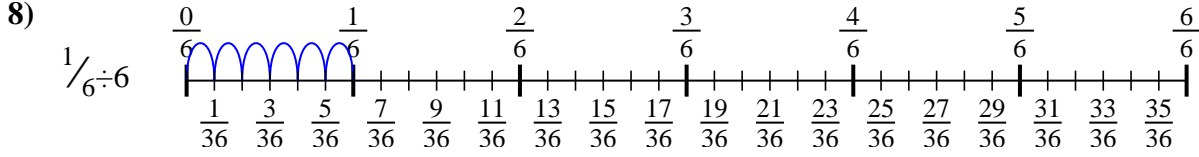
5.  $\frac{1}{30}$



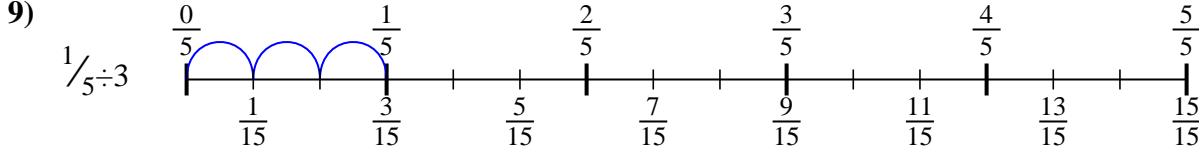
6.  $\frac{1}{20}$



7.  $\frac{1}{9}$



8.  $\frac{1}{36}$



9.  $\frac{1}{15}$



Use the numberline to solve each problem. The first is marked for you.

$1/30$

$1/36$

$1/20$

$1/9$

$1/15$

$1/24$

$1/30$

$1/35$

$1/10$

**Answers**

1. \_\_\_\_\_

2. \_\_\_\_\_

3. \_\_\_\_\_

4. \_\_\_\_\_

5. \_\_\_\_\_

6. \_\_\_\_\_

7. \_\_\_\_\_

8. \_\_\_\_\_

9. \_\_\_\_\_

1)

2)

3)

4)

5)

6)

7)

8)

9)